




Week beginning 1st June



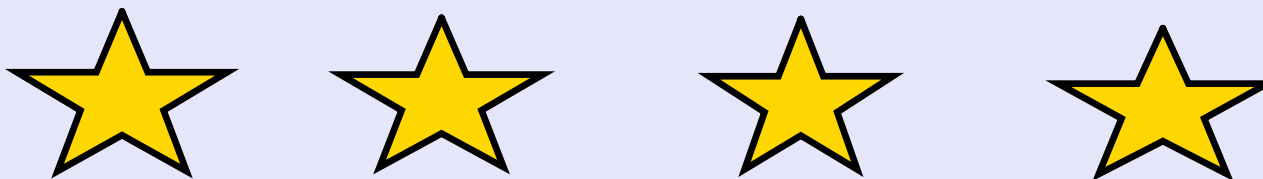
We have previously looked at halving a shape.
Can you split this shape in half by drawing a line?



Halving is when
you split an object
into two equal
parts.





We are now going to looking at halving amounts. To half an amount you need to share it into two equal groups.



I've got 4 stars. I need to share them equally between the two children.

How many has each child got?
Is it fair? So what is half of four?

one for you,
one for you




Can you go and find 20 objects and two plates. Can you share the below amounts evenly between the two plates and work out what half of each amount is?

4, 8, 6, 2, 10

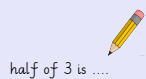
STL



Say the amount



Share it equally between the plates.



half of 3 is

Write what half the amount is.

Can you find half of each of these amounts by sharing the dots on each side of the ladybird?



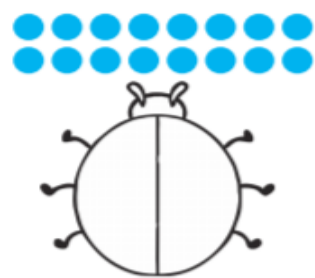
Half of 10 is _____



Half of 12 is _____




Half of 14 is _____



Half of 16 is _____



Half of 18 is _____



Half of 20 is _____



Keep your learning safe, ready to return to school. In the meanwhile, why not take a photograph of your learning and share it on the school Twitter page?



@elstonhallsch

@palmercrosssch

@edwardeldersch

@goldthornpark