




Week beginning 15th June




This week we are looking sharing. Sharing is when we share a set amount out equally.



Do you know what this symbol means?

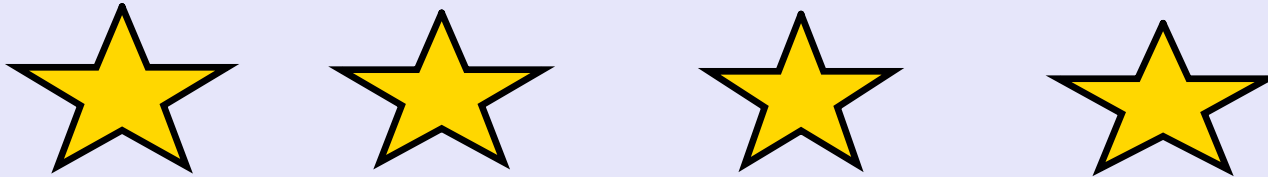
So if I had $8 \div 2 = \dots$
I would share 8 sweets between
2 people equally



This is the division sign.
It means to share an amount



Equipment you need:
 -2/3 plates or circles
 -A handful of objects



$4 \div 2 = \dots$ I need to share four equally between the two children.

How many has each child got?
 Is it fair?

one for you,
 one for you



Can you solve these number sentences using your objects and plates?

$$8 \div 2 =$$

$$10 \div 2 =$$


$$14 \div 2 =$$

$$6 \div 2 =$$


$$2 \div 2 =$$

$$16 \div 2 =$$

Can you share these sandwiches equally between the bears.
Could you write the number sentence?



Can you share these strawberries equally between the bears?
Could you write the number sentence?



I wonder if you can solve this one? Could you write the number sentence?





Keep your learning safe, ready to return to school. In the meanwhile, why not take a photograph of your learning and share it on the school Twitter page?



@elstonhallsch

@palmercrosssch

@edwardeldersch

@goldthornpark

